









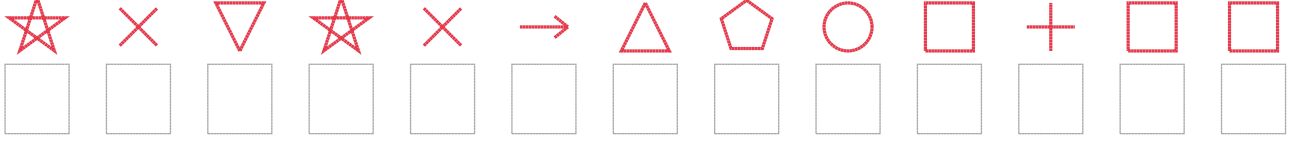


# Şekil Sayı Eşleştirme

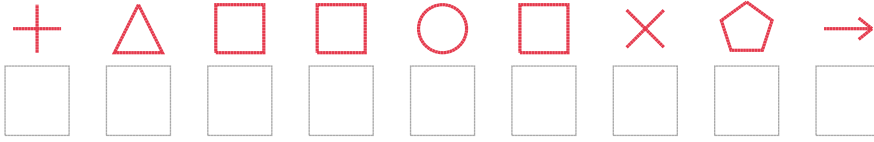
 = 9	 = 1	 = 3	 = 8	 = 6	 = 0	 = 5	 = 2	 = 4	 = 7
--	--	--	--	--	--	---	--	--	--

Aşağıdaki uzun şifreleri hatasız çözerek altlarına yazın:

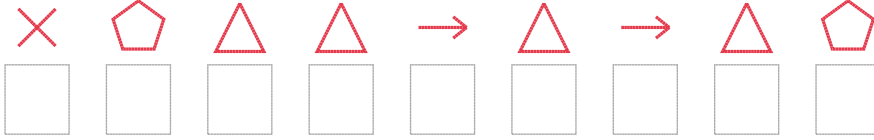
1. Şifre



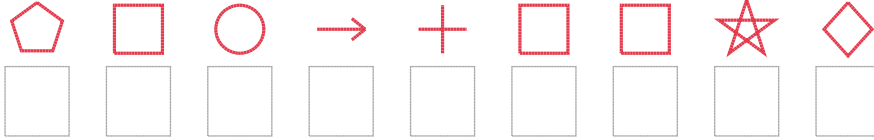
2. Şifre



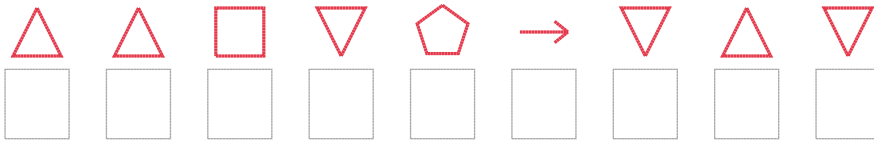
3. Şifre



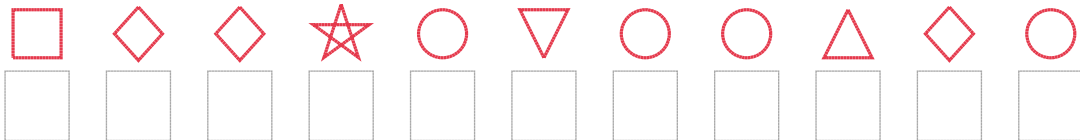
4. Şifre




5. Şifre



6. Şifre



7. Şifre



□ BONUS: 4. ve 2. şifrenin ikinci rakamının toplamı kaçtır? .....

## Cevap Anahtarı

1. Şifre: 9849810256766

2. Şifre: 706656821

3. Şifre: 820010102

4. Şifre: 265176693

5. Şifre: 006421404

6. Şifre: 63395455035

7. Şifre: 707196181

□ Bonus Soru Cevabı: 6